

# WHMIS Test

## WHMIS Self-Teach Program



<b>Name</b>	_____
<b>Title / Position</b>	_____
<b>Company / Location</b>	_____
<b>Date</b>	_____

**Total Points:**

100
-----

The questions are multiple choice. Choose only one answer. Leave the right-hand column blank. You will need to refer to the glossary in your self-teach manual, the RemoKleen label and the Remokleen safety data sheet.

There are 25 questions, each worth 4 points. Your instructor or supervisor will tell you how many points you need in order to pass the test.

### WHMIS in Your Workplace

The last page has some questions based on the information you collected for your "WHMIS in Your Workplace" review. (If you weren't able to complete the review, you won't be able to answer these questions.) There are no points or scores given for this section – it is intended to help your employer make sure the hazard information you need is available to you in your workplace.










### Note to Employer

The Answer Key is in the Administrator's Package. If you have any comments or questions about this test or the self-teach program, contact Danatec at 1.800.465.3366.

#### Important Copyright Notice

© 2018. All rights reserved. Reproduction of this test by any means, including photocopying or scanning, is prohibited unless permission is granted in writing. Contact Danatec: 1.800.465.3366.

Each correct answer is worth 4 points. Minus 4 for each incorrect answer.

1. Which source will give you the most information about a specific product?
- A) The supplier label on the product
  - B) General WHMIS education
  - C) The SDS for the product
- 
2. Where will Dan look to find the exposure limits for RemoKleen?
- A) The workplace label on the small bottle of RemoKleen
  - B) The supplier label on the drum of RemoKleen
  - C) The SDS for RemoKleen
- 
3. What does WHMIS stand for?
- A) Worker's Hazardous Materials Identification System
  - B) Workplace Hazardous Materials Information System
  - C) Workplace Hazard Management Identity System
- 
4. What is dermal toxicity?
- A) The ability of a substance to cause harm by being absorbed through the skin
  - B) The effect of hazardous vapours on a person's skin
  - C) The degree of difficulty in washing a chemical from skin with water
- 
5. If you get sulphuric acid on your face and it immediately begins to burn your skin, what kind of effect is this?
- A) Acute
  - B) Chronic
  - C) Multiple
- 
6. What word describes the ease with which a material evaporates?
- A) Viscosity
  - B) Solubility
  - C) Volatility
- 
7. What does TLV stand for?
- A) Threshold Limit Value
  - B) Time Limit Value
  - C) Toxicity Limit Value
- 
8. What hazards are indicated by a label with these symbols?
- A) Oxidizer and Corrosive
  - B) Flammable and Corrosive
  - C) Flammable and Reactive
- 

- 
9. What is a label with this symbol warning you about?
- A) The product could provide oxygen to increase the risk or intensity of a fire
  - B) The vapours are flammable and could ignite
  - C) The contents are under pressure
- 
- 
10. Which symbol warns you about a product that can irritate your eyes and skin or cause allergic reactions?
- A) 
  - B) 
  - C) 
- 
11. Which symbol warns you about a product that could cause internal damage?
- A) 
  - B) 
  - C) 
- 
12. One of the risks listed at the top of the RemoKleen label is "Toxic if swallowed or inhaled." Which precautionary statement addresses this risk?
- A) Do not get in eyes, on skin or on clothing
  - B) Do not breathe mist, vapours or spray
  - C) Wash thoroughly after handling

Each correct answer is worth 4 points. Minus 4 for each incorrect answer.

13. Dan fills up a spray bottle with RemoKleen to use at his work station.

What must he do to let everybody know what's in the spray bottle?

- A) Make a workplace label and put it on the bottle  
 B) Tell his coworkers about the danger  
 C) Post a sign near his work station to warn people

14. Besides the product name and safe handling information, what else should be listed on a workplace label?

- A) A reference to the SDS for more information  
 B) The shipping name of the product  
 C) The Chemical Abstracts Service number of the product

15. In which section of the SDS would you find information about the stability of the product?

- A) 4       B) 7       C) 10

16. In which section of the SDS would you find instructions for safe storage of the product?

- A) 7       B) 9       C) 14

17. In which section of the SDS would you find information about how to help someone who has accidentally swallowed a hazardous product?

- A) 3       B) 4       C) 8

18. If someone gets RemoKleen in their eyes, for how long should they rinse with water?

- A) 5 to 10 minutes  
 B) 15 to 60 minutes  
 C) 60 to 90 minutes

19. According to Section 2 of the SDS, what is the most serious effect that could result from swallowing RemoKleen?

- A) Burns to the mouth and throat  
 B) Burns to the stomach  
 C) Death

20. Section 2 of the RemoKleen SDS lists many possible health effects, some of them very serious. What might be the result of repeated or prolonged exposure?

- A) Cancer  
 B) Strep Infection  
 C) Chronic eye and skin irritations

21. According to Section 2 of the SDS, what could be the result of repeated or long-term (chronic) exposure to RemoKleen spray mist?

- A) Frequent attacks of bronchial infection  
 B) Lung cancer  
 C) Death

22. What type of gloves should be worn when working with RemoKleen?

- A) Latex       B) Leather       C) Cloth

23. What colour is RemoKleen?

- A) Yellow       B) Purple       C) Orange

24. According to Section 10 of the SDS, with which material will RemoKleen react strongly?

- A) Oxidizers       B) Flammables       C) Compressed gases

25. What does impervious protective clothing do?

- A) Protects the wearer from flames  
 B) Prevents all chemicals from passing through  
 C) Prevents certain chemicals from passing through

A perfect score is 100. Marking hint: For each wrong answer, subtract 4 points.  
 Write the final score at the top of the front page.

Total Points:

100